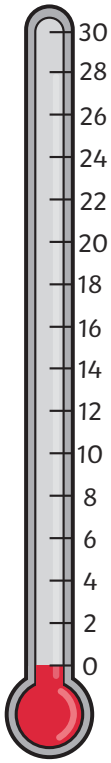


# Reading Scales on Thermometers

To use thermometers with different scales to measure temperature in degrees Celsius.



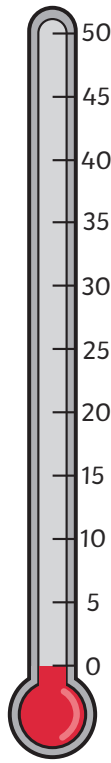
Draw lines to match each temperature with the correct place on the thermometer.



24°C

16°C

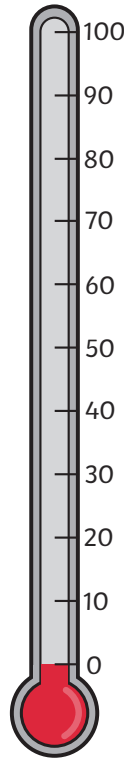
8°C



30°C

45°C


15°C



100°C

10°C

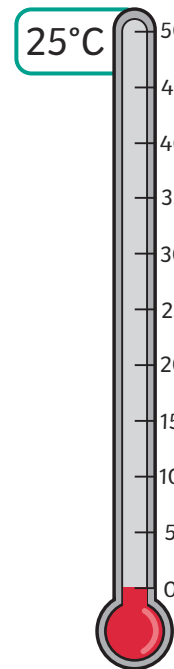
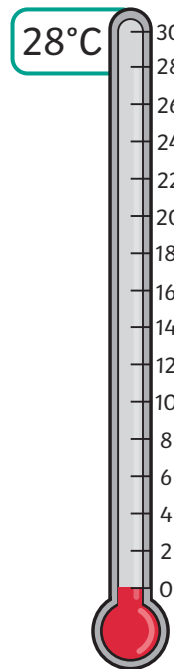
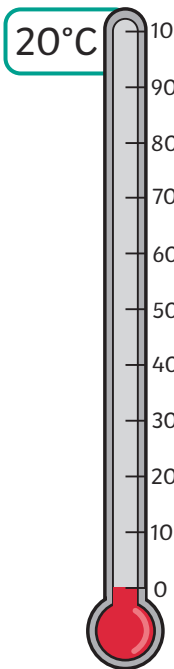
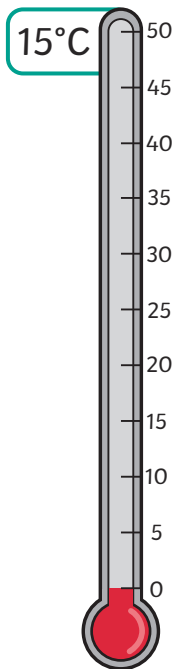
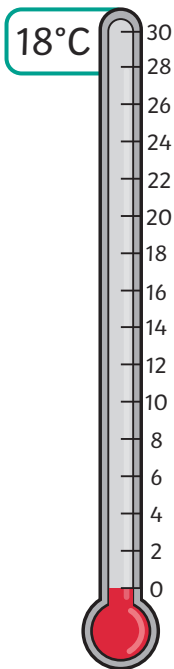
50°C



Draw a sun by **hottest** temperature.

Draw a snowflake by the **coldest** temperature.

Shade the thermometers to show the temperature in degrees Celsius.  
Draw lines to sequence them from the **coldest** to the **hottest** temperature.



coldest

hottest